

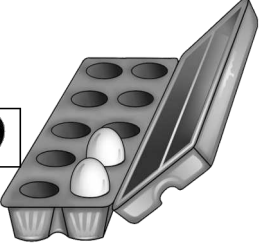
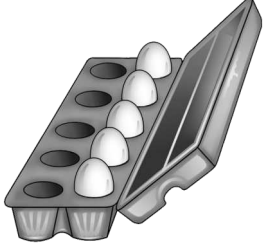

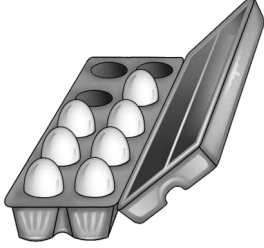
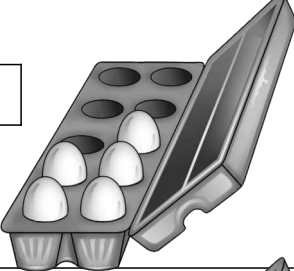
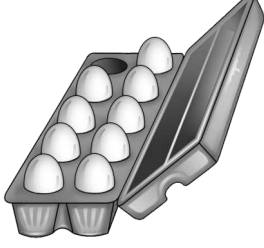

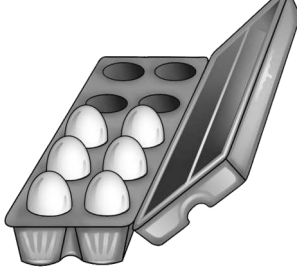
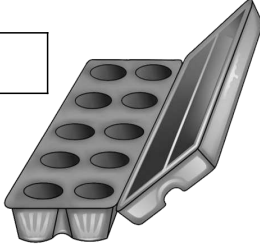
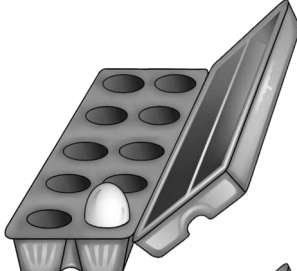
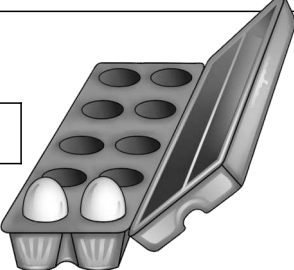


$4 + \square = 10$ 	$\square + \square = 10$ 
$\square + \square = 10$ 	$\square + \square = 10$ 
$\square + \square = 10$ 	$\square + \square = 10$ 
$\square + \square = \square$ 	$\square + \square = \square$ 
$\square + \square = \square$ 	$\square + \square = \square$ 
$\square + \square = \square$ 	$\square + \square = \square$ 
$\square + \square = \square$ 	$\square + \square = \square$ 