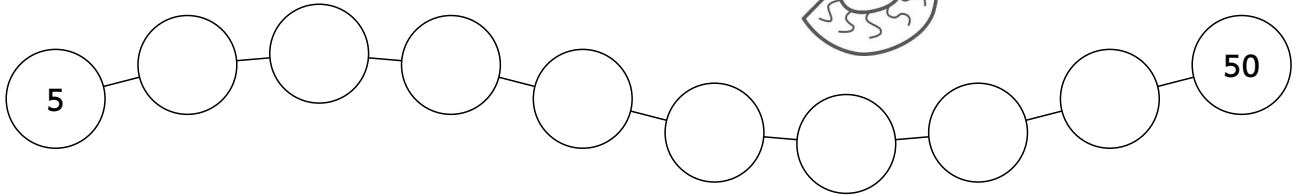



Name: _____

Datum: _____

Division durch 5 und 10

Fülle die Perlenkette weiter.



$50 : 5 = \underline{\quad}$

$45 : 5 = \underline{\quad}$

$30 : 5 = \underline{\quad}$

$5 : 5 = \underline{\quad}$

$20 : 5 = \underline{\quad}$

$45 : 5 = \underline{\quad}$

$35 : 5 = \underline{\quad}$


$10 : 5 = \underline{\quad}$

$5 : 5 = \underline{\quad}$

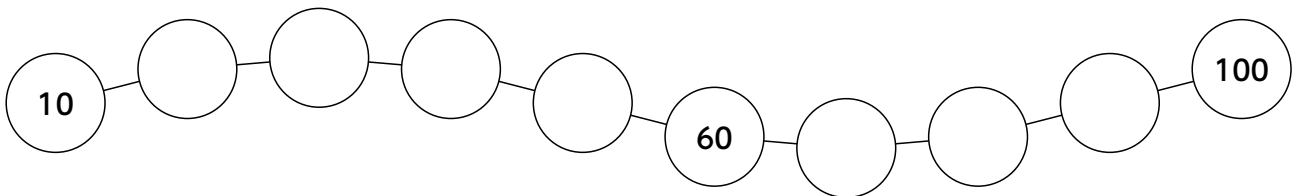
$10 : 5 = \underline{\quad}$

$35 : 5 = \underline{\quad}$

$50 : 5 = \underline{\quad}$



Fülle die Perlenkette weiter.



$60 : 10 = \underline{\quad}$

$60 : 10 = \underline{\quad}$

$40 : 10 = \underline{\quad}$

$10 : 10 = \underline{\quad}$

$90 : 10 = \underline{\quad}$

$70 : 10 = \underline{\quad}$

$20 : 10 = \underline{\quad}$

$70 : 10 = \underline{\quad}$

$50 : 10 = \underline{\quad}$

$70 : 10 = \underline{\quad}$

$20 : 10 = \underline{\quad}$

$90 : 10 = \underline{\quad}$

